



A. Look at the picture and write a small paragraph with the help of the following words :



birthday

balloons

candles

paper plates

sweets

ribbons

MY BIRTHDAY PARTY

.....

.....


.....

.....

.....



B. Look at the picture and write a small paragraph on it. Take use of the words given :



children  
swims

park  
happy


see-saw  
ladder

AT THE PARK

Three large, overlapping arch-shaped frames containing horizontal dotted lines, intended for writing a paragraph.

12/11/2017

1. चित्र में दिखाए गए सभी संज्ञा शब्दों का लिखिए ।



2. चित्र में दिखाए गए फल, फूल व सब्जियों के नाम अलग-अलग करके लिखिए ।



गेंदा



आलू



पपीता



सूरजमुखी



मटर



आम



टमाटर



गुलाब



केला



बैंगन



अनानास



कमल

फल

---



---



---



---

फल

---



---



---



---

सब्जियां

---



---



---



---

चित्र में दिखाए गए पशु, पक्षियों व कीट-पतंगों के नाम अलग-अलग करके लिखिए।



तोता



शेर



चाय़



गाय़



कनारा



खरगल



मोर



मकड़ी



घोड़ा



भुरग़ा



हिरन





मधुपयखी

पशु

पक्षी

कीट-पतंग

4. चित्रों में स्थानों तथा इमारतों को पहचानकर उनके नाम लिखिए।



\_\_\_\_\_

\_\_\_\_\_

\_\_\_\_\_

# SANSKAR CITY INTERNATIONAL SCHOOL

Class : III

Worksheet No. : - 1

Date :- 17/04/2017

Subject : Maths

Write the following numbers in expanded form:

(a)  $8354 = \dots + \dots + \dots + \dots$

(b)  $5640 = \dots + \dots + \dots + \dots$

(c)  $3400 = \dots + \dots + \dots + \dots$

(d)  $7690 = \dots + \dots + \dots + \dots$

Write the following numbers in short form :

(a)  $7000 + 700 + 70 + 7 = \dots$

(b)  $10000 + 4000 + 200 + 3 = \dots$

(c)  $40000 + 700 + 4 = \dots$

(d)  $20000 + 5000 + 20 + 5 = \dots$

(e)  $90000 + 900 + 9 = \dots$

Find out the place value of 98652.

Write the numbers in between :

(i) ~~2120~~ and 2122

(ii) 7165 and 7167

(iii) ~~4444~~ and 4446

(iv) 5050 and 5052

(v) ~~3275~~ and 3277

(vi) 6319 and 6321

Write all the numbers in between :

(i) 1976 and 1981

(ii) 7099 and 7103

(iii) 2000 and 2005

(iv) 9197 and 9201

(v) 2941 and 2946

(vi) 2258 and 2263

1. Fill in the blanks :

(i) The number just before 4999 is ..... and just after it is .....

(ii) The number just before 6000 is ..... and just after it is .....

(iii) The number just before 4350 is ..... and just after it is .....

(iv) The number just before 6001 is ..... and just after it is .....

Count forward and write :

(i)	2193								
(ii)	2400								
(iii)	5007								
(iv)	5111								
(v)	8409								

Write eight numerals counting backwards starting with :

- (i) 2402      (ii) 1850      (iii) 2007      (iv) 9999  
 (v) 1913      (vi) 7002      (vii) 2509      (viii) 1010

Follow the pattern and fill in the blanks :

(i)	4410	4420	4430						
(ii)	5550	5540	5530						
(iii)	2138	2136	2134						
(iv)	6155	6160	6165						

Fill in the predecessors and successors :

Number	Predecessor	Successor
4590	.....	.....
3210	.....	.....
1500	.....	.....
2000	.....	.....
5555	.....	.....
6780	.....	.....
7815	.....	.....
8245	.....	.....

# SANSKAR CITY INTERNATIONAL SCHOOL

Class : III

Worksheet No. : - 01

Date :-

Subject : Science

A. Tick (✓) the substances that dissolve in water.



MILK



OIL



SUGAR



WOOD



ERASER



INK

INK

B. 1) What a cold, sweet and creamy and wonderful to eat! Everyone's favourite treat especially on a hot summer day is an ice cream! Colour the boxes with the colours of the flavours mentioned in each.

chocolate

vanilla

orange

black currant


strawberry

raspberry


butterscotch

pista

2) Draw and colour your dream ice cream.




**C** Actions in the pictures below cause pollution. Identify the kind of pollution in each.



1.



2.



3.



4.

**D** Match the pictures with the things they are used to measure.

Column A

1.



2.



3.



Column B

a.



b.



c.



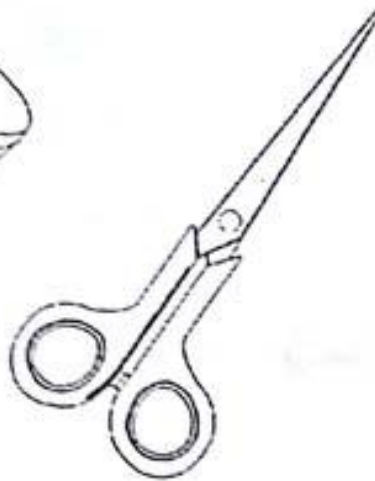



Arrange the letters in their right order to form the names of flowers.


- a) PEATWEES \_\_\_\_\_
- b) MRAIDOLG \_\_\_\_\_
- c) JMINEAS \_\_\_\_\_
- d) TLOUS \_\_\_\_\_
- e) ARGOM \_\_\_\_\_

- f) DHAAIL \_\_\_\_\_
- g) XOLHP \_\_\_\_\_
- h) ANSPY \_\_\_\_\_
- i) BISIHCUS \_\_\_\_\_

**F** Colour the living things.



**G**. Let's have fun  
Use rainbow colours to paint this picture.



# SANSKAR CITY INTERNATIONAL SCHOOL

Class : III SUMMER VACATION ASSIGNMENT Date :-18.04.2017

Subject : Social Studies

Q.1 Locate one planet in the night sky. It is also called the evening Star. Name the planet.

Q.2 Name the person who travelled to the moon. He took picture of the Earth from the moon and said that the Earth is round in shape.

Q.3 How many times does the Earth rotate in one day?

Q.4 How much time does the Earth take to complete one revolution?

Q.5 Name the planet in the solar system.

